




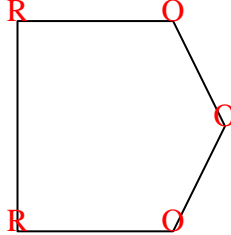


Count the number of Acute, Obtuse and Right angles inside each shape.

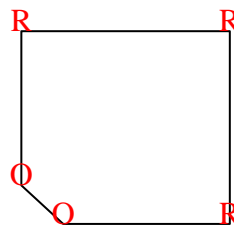
Ex)



1)



2)



Answers

A O R

Ex. 0 0 4

1. 0 3 2

2. 0 2 3

3. 2 2 0

4. 2 0 1

5. 0 6 0

6. 1 2 1

7. 2 2 0

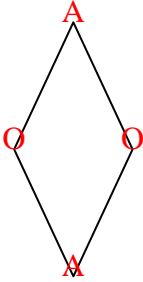
8. 0 2 3

9. 0 0 4

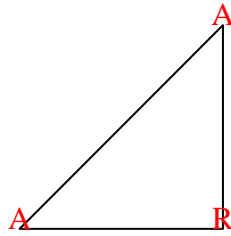
10. 1 4 0

11. 0 7 0

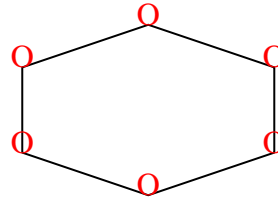
3)



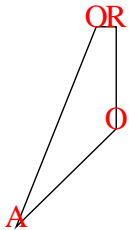
4)



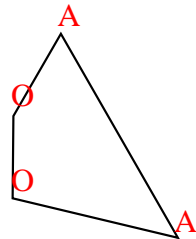
5)



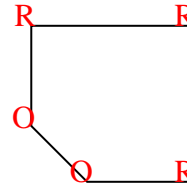
6)



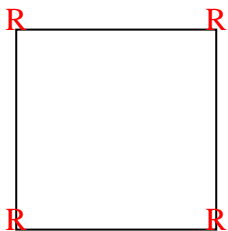
7)



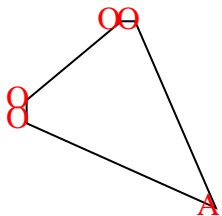
8)



9)



10)



11)

